
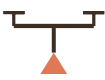


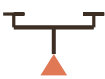



## 代數初步 — 解方程


認識未知數  $x$ ，求簡單方程式嘅解（加減乘除四種）


1   $x + 5 = 12$   $x = ?$


2   $x + 7 = 15$   $x = ?$


3   $x + 8 = 20$   $x = ?$

4   $x - 4 = 8$   $x = ?$

5   $x - 6 = 14$   $x = ?$

6   $x \times 3 = 18$   $x = ?$

7   $x \times 5 = 35$   $x = ?$

8   $x \div 4 = 6$   $x = ?$



9



$$x \div 6 = 9 \quad x = ?$$